




Trek's Travels –



Talking about the square shape




1. How many sides does a square have? _____
2. Does it have straight or curved sides?

3. How many corners can you count on the square?

4. Can you see any squares in the room?

5. What other objects have a square shape?

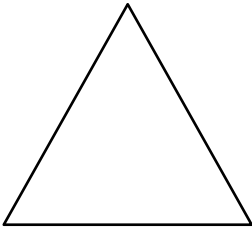
Talking about the circle shape



1. Can you see any corners on the circle? _____
2. Can you see any circles in the room?

3. What other objects have a circle shape?

Talking about the triangle shape



1. How many sides does a triangle have? _____

2. Are the sides straight or curved?

3. How many corners can you count on the triangle?

4. Can you find any triangles in the room?

5. What other objects have a triangle shape?

6. Why is a triangle different from a square?

Talking about the rectangle shape



1. How many sides does a rectangle have? _____

2. Are the sides straight or curved?

3. How many corners can you count on the rectangle?

4. Can you find any rectangles in the room?

5. What other objects have a rectangle shape?


6. Why is a square different from a rectangle?

ACTIVITY –

Join the dots and colour.



square



rectangle



triangle




circle

Aim: to recognise the four basic shapes and practice pencil control.

ACTIVITY –

Count and colour the **squares** and **rectangles**.



How many squares? _____

How many rectangles? _____

Aim: to identify shapes and practice counting.

Trek's World Travels

Where in the world does Trek learn about shapes?

China

